

Year 1 – Summer 1

This term your child will be learning about:

# Multiplication & Division

**Fluency:**

How many wheels altogether?




$2 + 2 + 2 + 2 + 2 =$

How many fingers altogether?



$5 + 5 + 5 =$

Are the groups equal or unequal? Write a label for each.



Complete the sentences



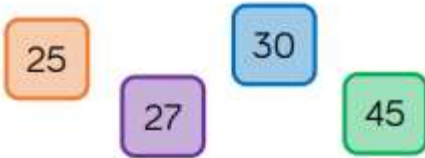
There are \_\_\_ groups of \_\_\_ pencils.



There are \_\_\_ groups of \_\_\_ flowers.

**Problem Solving:**

**Odd One Out**



Which is the odd one out? Explain your answer.


Dora has 10 biscuits.



She wants to share them equally at her party.

How many people could be at the party?

Who has made equal groups?



Explain how you know.

**Vocabulary**

- Multiples
- Repeated addition
- Lots of
- Arrays